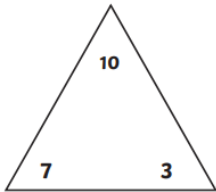


July Maths Challenge

Choose a challenge to solve –
Can you solve more than one?

Challenge # 1

Can you complete the fact family using the information from the triangle?

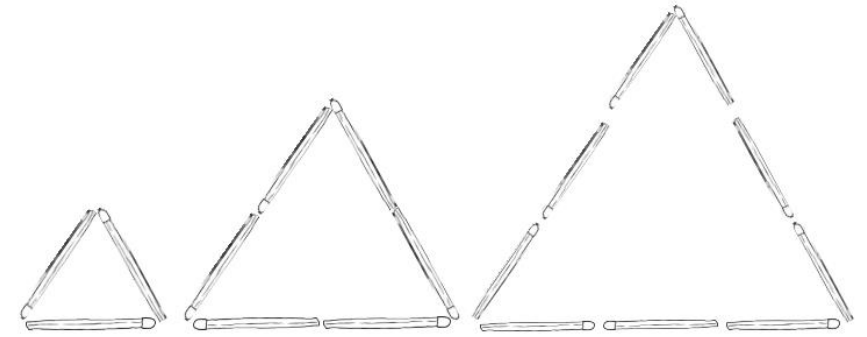


	+		=	
	+		=	
	-		=	
	-		=	

Can you make another triangle fact family?

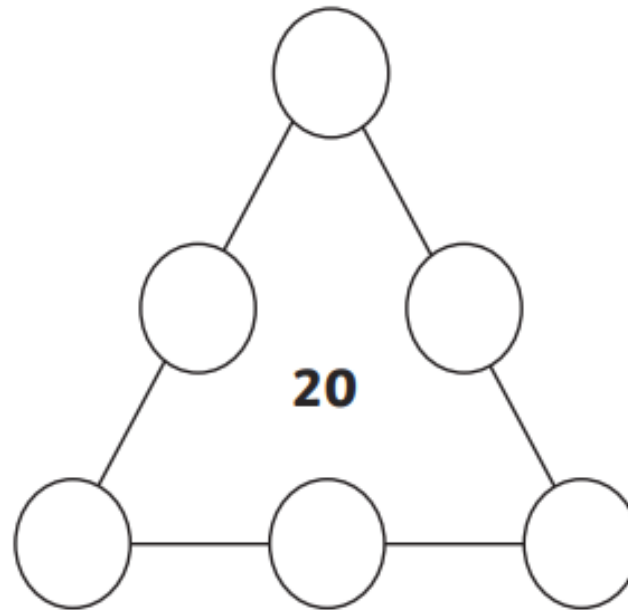
Challenge # 3

Count the matchsticks in each triangle. How many matchsticks do you think will be in the next triangle? How many will be in the one after that?



Challenge # 2

Can you complete the triangle so that each side adds up to 20?



Can you make another triangle that adds up to another number?

Creative Challenge

Can you create a picture using only triangles?
You can either draw your picture or be really creative and make your picture!